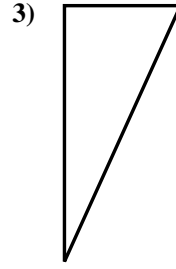
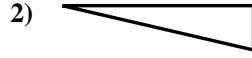
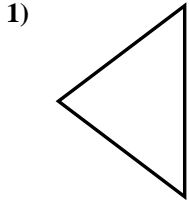


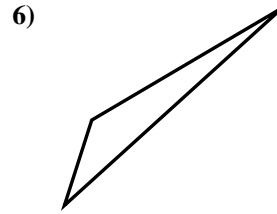
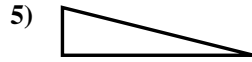
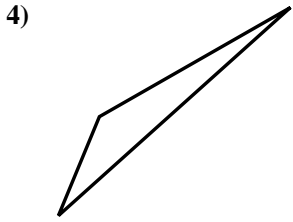


Determine if the triangle shown is a right triangle (yes) or not (no).

Answers



1. _____



2. _____

3. _____

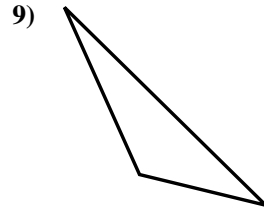
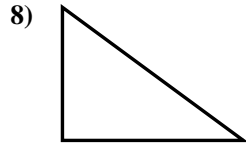
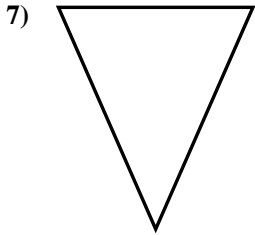
4. _____

5. _____

6. _____

7. _____

8. _____

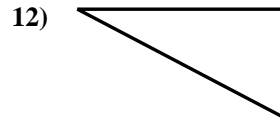
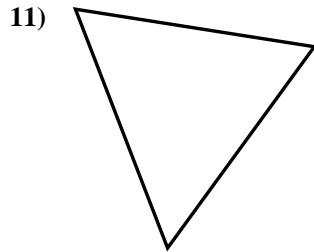
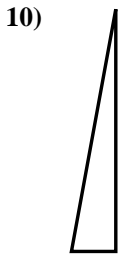


9. _____

10. _____

11. _____

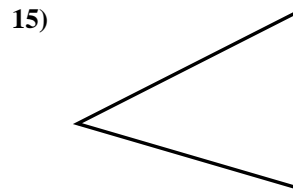

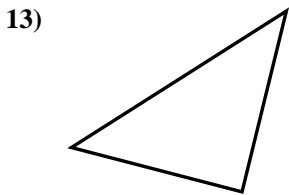
12. _____



13. _____

14. _____

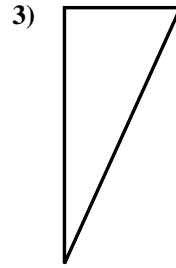
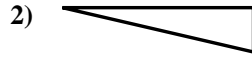
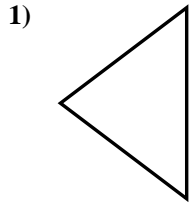
15. _____



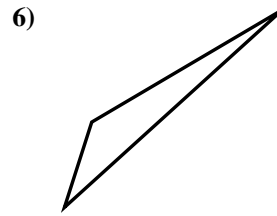
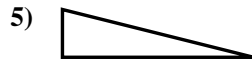
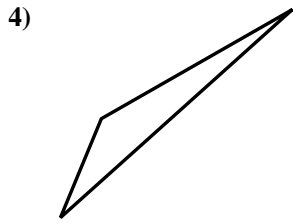


Determine if the triangle shown is a right triangle (yes) or not (no).

Answers



1. no



2. yes

3. yes

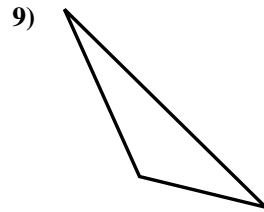
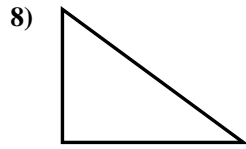
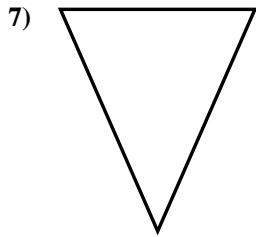
4. no

5. yes

6. no

7. no

8. yes

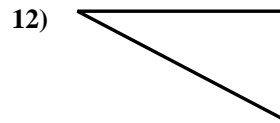
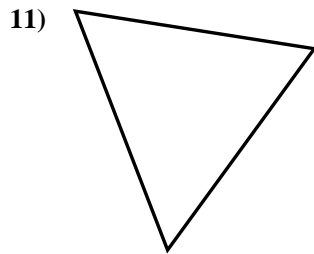


9. no

10. yes

11. no

12. yes



13. yes

14. no

15. no

